



Year 4 Mrs Kitching's Group Arithmetic Homework 10 Complete by 02/12/2020


1 $10 - 6 =$




2 $3 + 16 + 12 =$




3 $75 - 45 =$




4 $7 \times 10 =$



5 $10 - 2 =$



6 $14 + 16 =$




7 $3 \times 5 =$



8 $50 + 26 =$




9 $4 + 3 + 7 + 6 + 2 =$




10 + 30 = 100



11 $\frac{1}{2}$ of 16 =



12 $5 \times 5 =$



13 Reorder these numbers from smallest to biggest.

65 34 87 2 19 17

14 Write the value of '7' in this following number.

79

15 Complete the table:

Number	Tens	Ones
15	1 ten	5 ones
85		
62		
36		

16 Fill in the gaps.

69 is _____ tens and _____ ones

_____ + _____ = 69

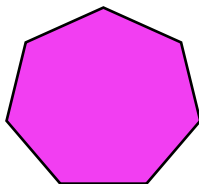
17 Use the correct symbol <, > or =

15 51

98 96

14 18 14

18 Name the shape and complete the properties table:



Name of shape	
Number of sides	
Number of faces	
Number of vertices	

19 Draw a pair of vertical line