

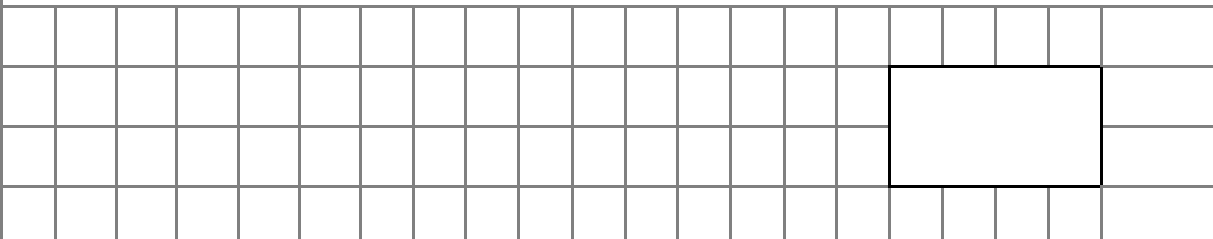



1	<p>Complete the 2 times table:</p> $2 \times 2 = \quad 1 \times 2 = \quad 10 \times 2 = \quad 4 \times 2 =$ $5 \times 2 = \quad 6 \times 2 = \quad 3 \times 2 = \quad 11 \times 2 =$ $12 \times 2 = \quad 8 \times 2 = \quad 9 \times 2 = \quad 7 \times 2 =$	
2	$46 - 39 =$	
		
3	$57 + 23 + 20 =$	
		
4	<p>Complete the following</p> $5 + 6 =$ <p>So $50 + 60 =$</p>	
5	5×5	
		

12 Name the shape and complete the properties table:



Name of shape	
Number of sides	
Number of faces	
Number of vertices	

13 Draw a vertical line

Round these numbers to the next 10:

14	5	9	(to the next 10)																
	3	7	(to the nearest 10)																
	2	1	(to the 10 before)																

15 Measure this line in cm



cm

16 Complete these timetable questions.

$1 \times 5 =$	$7 \times 5 =$
$9 \times 5 =$	$3 \times 5 =$
$4 \times 5 =$	$6 \times 5 =$

