


1	$10 - 9 =$	
2	$20 + 6 + 25 =$	
3	$23 - 11 =$	
4	$3 \times 5 =$	
5	$50 - 25 =$	
6	$3 + 2 + 5 =$	


7 $12 \times 10 =$




8 $15 + 42 =$




9 $42 - 20$




10 + 94 = 100



11 $\frac{1}{2}$ of 18 =



12 $55 \div 5 =$



13 Reorder the following numbers from largest to smallest.

28 15 98 65 57

14 Write the value of '7' in this following number.

57

15 Complete the table:

Number	Tens	Ones
15	1 ten	5 ones
26		
36		
89		

16 Fill in the gaps.

65 is _____ tens and _____ ones

_____ + _____ = 65


17 Use the correct symbol <, > or =

47 70

69 68

23 32 25

18 Name the shape and complete the properties table:



Name of shape	
Number of sides	
Number of faces	
Number of vertices	

19 Draw a horizontal line