




7 $8 \times 2 =$




8 Double 7




9 $8 + 6 + 2 + 4 + 7 + 3 =$




10 + 20 = 100



11 $\frac{1}{2}$ of 16 =



12 $30 \div 10 =$



13 Order the following numbers from largest to smallest

41 35 65 12 98 5

14 Write the value of '9' in this following number.

19

15 Complete the table:

Number	Tens	Ones
15	1 ten	5 ones
99		
75		
36		

16 Fill in the gaps.

12 is _____ tens and _____ ones

_____ + _____ = 12

17 Use the correct symbol <, > or =

60 50

45 87

13 13 30

18 What is the next 10 for the following numbers?


37

24

78

67

19 Name the shape and complete the properties table:



Name of shape	
Number of sides	
Number of faces	
Number of vertices	

20

Draw a vertical line.