

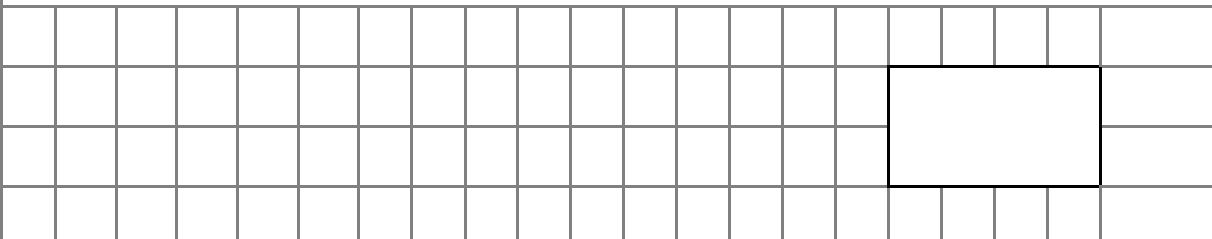


Year 4 Mrs Kitching's Group Arithmetic Homework 19

Complete by 24/02/2021

1	<p>Complete the 2 times table:</p> $2 \times 2 =$ $1 \times 2 =$ $10 \times 2 =$ $4 \times 2 =$ $5 \times 2 =$ $6 \times 2 =$ $3 \times 2 =$ $11 \times 2 =$ $12 \times 2 =$ $8 \times 2 =$ $9 \times 2 =$ $7 \times 2 =$	
2	$60 - 48 =$	
		
3	$49 + 51 =$	
		
4	<p>Answer these additions</p> $7 + 9 =$ $70 + 90 =$	
5	$4 \times 5 =$	
		

12 Name the shape and complete the properties table:



Name of shape	
Number of edges	
Number of faces	
Number of vertices	

13 Draw a horizontal line.

14 Complete these multiplications

$2 \times 10 =$

$8 \times 10 =$

$4 \times 10 =$

$7 \times 10 =$

$9 \times 10 =$

$12 \times 10 =$

$6 \times 10 =$

$11 \times 10 =$

$3 \times 10 =$

$10 \times 10 =$

$1 \times 10 =$

$5 \times 10 =$

Round these numbers:

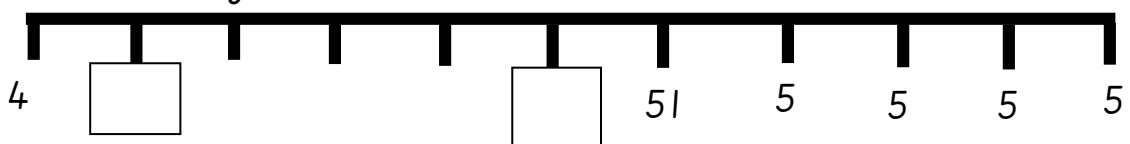
15	4	3	(to the 10 before)	
	5	8	(to the next 10)	
	5	7	(to the next 10)	

16 Measure this line in cm



cm

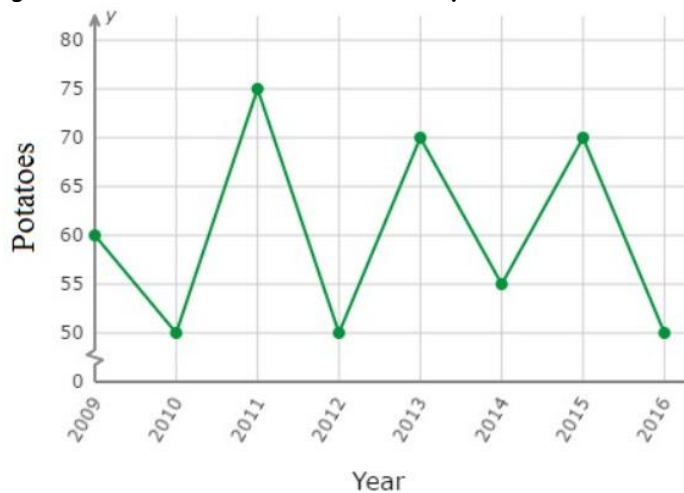
17 Write the missing numbers on this number line:



18 Kelly went to a shop and bought a magazine for 76p and a chocolate bar for 20p. What change did she get from £1? (£1 = 100p)

19 A farmer sells bags of kiwis. There are 10 kiwis in each bag. How many bags does he need to sell for an order of 90 kiwis?

20 Look at this line graph showing the amount of potatoes grown in my garden. Answer the questions below:



1. Which 3 years was potato production at the lowest?
2. Which year was the greatest potato production?
3. What was the difference in potatoes produced between 2013 and 2014?