

6

If I know $3456 + 2316 = 5773$ use this to fill in the gaps

$$5 \ 7 \ 7 \ 3 - \boxed{} = 2 \ 3 \ 1 \ 6$$

$$\boxed{} - 2 \ 3 \ 1 \ 6 = 3 \ 4 \ 5 \ 6$$

7

$$\frac{1}{2} \text{ of } 300 =$$

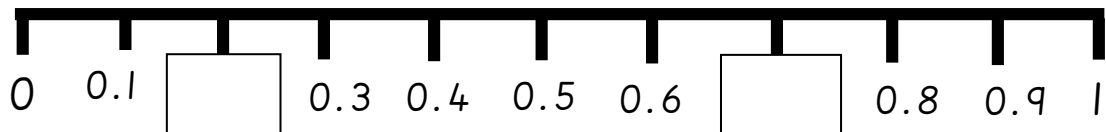
8

Is this number a multiple of 7? How do you know?

20

9

Write the decimals on this number line:



10

Tick which of these is true (there are more than one correct)

4010 has...

Place value	Tick if true
4010 ones	
401 hundreds	
401 tens	
4 thousands and 1 ten	
401 ones	

11


Solve these fraction calculations:

$$\frac{6}{11} + \frac{7}{11} =$$

$$\frac{11}{12} - \frac{5}{12} =$$

--


12 Name the shape and complete the properties table:



Name of shape	
Number of sides	
Number of faces	
Number of vertices	
Number of lines of symmetry	

13 Draw a pair of perpendicular lines

14 A square has sides of 8cm in length. What is its perimeter?



Round these numbers:

15	4	5	6	(to the nearest 10)															
	3	2	3	1	(to the nearest 100)														
	6	7	5	9	(to the nearest 1000)														

16 Measure this line in cm and in mm



cm
mm

17 Convert these:

2600ml = _____ L

6kg = _____ g

1.4km = _____ m

