

Name:



Maths Assessment Year 4: Number and Place Value

1. Count in multiples of 6, 7, 9, 25 and 1 000; find 1 000 more or less than a given number.
2. Find 1 000 more or less than a given number.
3. Count backwards through zero to include negative numbers.
4. Recognise the place value of each digit in a four digit number.
5. Order and compare numbers beyond 1 000.
6. Identify, represent and estimate numbers using different representations. Read and write numbers up to 1 000 in numerals and in words.
7. Round any number to the nearest 10, 100 or 1 000.
8. Solve number and practical problems that involve all of the above and with increasingly large positive numbers.
9. Read Roman Numerals to 100.

Name:

Date:

Maths Assessment Year 4: Number and Place Value

1. Count in multiples of 6, 7, 9, 25 and 1 000; find 1 000 more or less than a given number.

Fill in the missing boxes:

6		18		30	36	
---	--	----	--	----	----	--

	14		28		42	49
--	----	--	----	--	----	----

9			36	45		
---	--	--	----	----	--	--

	50	75			150	
--	----	----	--	--	-----	--

4 marks

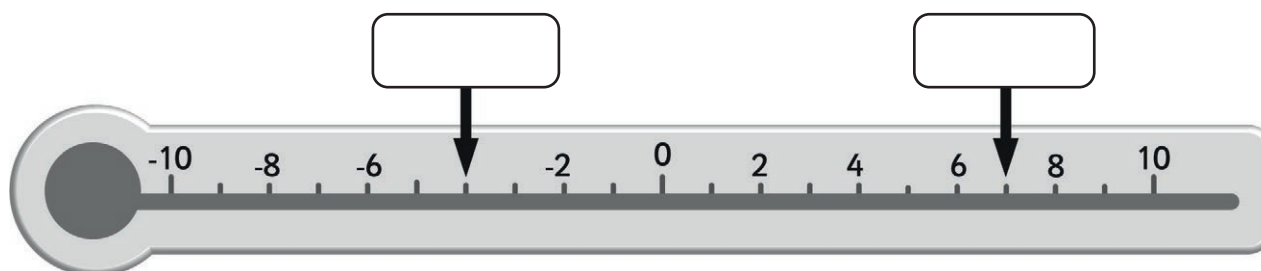
2. Find 1 000 more or less than a given number.

1 000 less		1 000 more
	1 026	
	14 321	

2 marks

3. Count backwards through zero to include negative numbers.

a) Some of the numbers on the thermometer have been rubbed off, can you fill in the missing numbers?



2 marks

b) Continue counting backwards in steps of 3.

6	3				
---	---	--	--	--	--

1 mark

Total for this page

4. Recognise the place value of each digit in a four digit number.

In each number say the value of the underlined digit:

number	value of underlined digit
3 4 <u>7</u> 8	
<u>2</u> 099	
6 21 <u>9</u>	
8 <u>7</u> 23	



4 marks

5. Order and compare numbers beyond 1 000.

a) Order the following numbers from smallest to greatest.

6 977	8 432	1 032	9 321	2 854	6 782
-------	-------	-------	-------	-------	-------

--	--	--	--	--	--



1 mark

b) Compare the numbers below using $<$ $>$ or $=$

	$<$ $>$ or $=$	
3 499		3 944
4 058		4 058
12 688		8 901
5 006		5 066
11 347		11 307



2 marks


6. Identify, represent and estimate numbers using different representations. Read and write numbers up to 1 000 in numerals and in words.

On each number line draw an arrow approximately where each number would be

a) 75



b) 650



2 marks



Total for this page

c) Fill in the missing boxes

Number in digits	Number in words
379	
	Six hundred and seven
511	
	Nine hundred and sixty two
309	

5 marks

7. Round any number to the nearest 10, 100 or 1 000.

a) Round these numbers to the nearest 10

23	
155	
1 366	

3 marks

b) Round these numbers to the nearest 100

567	
2,338	
12 445	

3 marks

c) Round these numbers to the nearest 1 000

3 362	
11 499	
216 733	

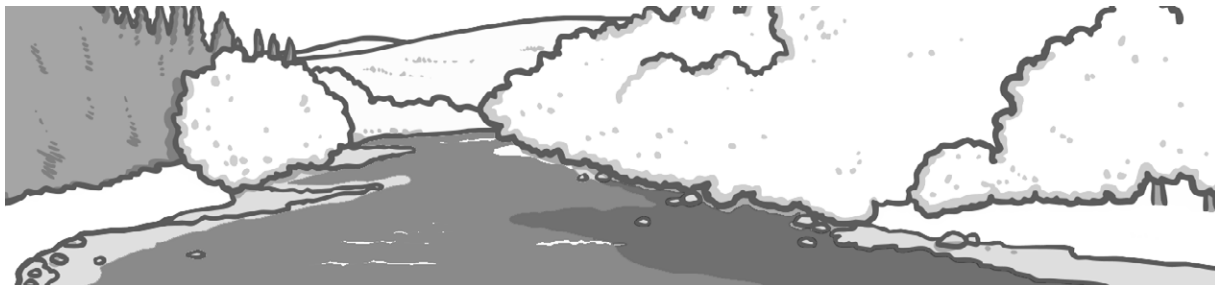
3 marks

Total for this page

8. Solve number and practical problems that involve all of the above and with increasingly large positive numbers.

Here is a list of the length of some of the greatest rivers in the world.

Name of river	Length	Rounded to the nearest 1 000 km
Congo	4 700 km	
Amazon	6 400 km	
Nile	6 695 km	
Indus	3 180 km	
Yellow River	6 650 km	



- a) Complete the table by rounding each river to the nearest 1 000 km.
b) Order the names of the rivers from the longest to the shortest.

longest river	
↓	
shorter river	

- c) How much shorter is the Yellow River than the Nile? Show your working in the box below.

answer: km



5 marks



1 mark

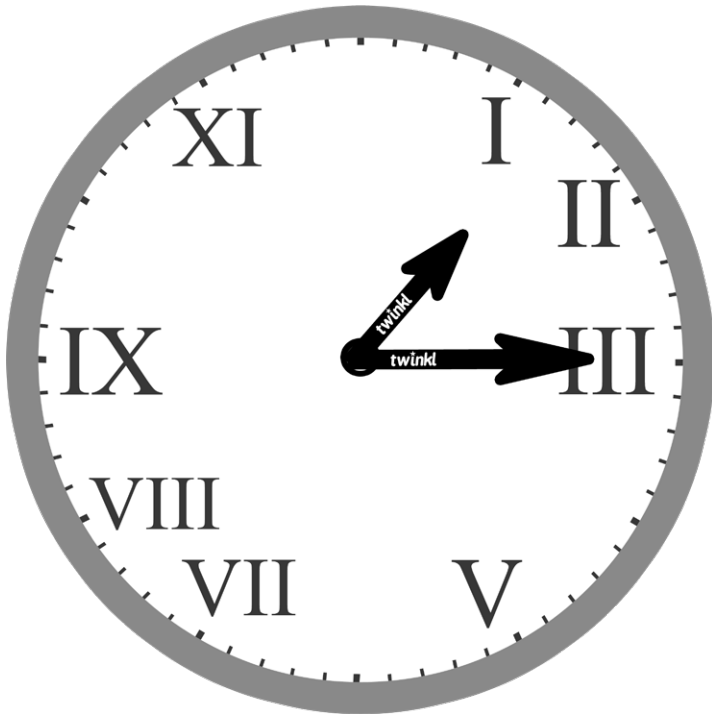


1 mark



Total for this page

9. Read Roman Numerals to 100.



a) Some of the Roman numerals on the clock above are missing, fill them in.

b) What are these Roman numerals?

XX	
L	
C	
XXIV	
LXXIII	
LIX	
XXXVI	



4 marks

7 marks

Total for this page

question	answer	marks	notes																												
1. Count in multiples of 6, 7, 9, 25 and 1 000.																															
	<table border="1"> <tr> <td>6</td> <td>12</td> <td>18</td> <td>24</td> <td>30</td> <td>36</td> <td>42</td> </tr> <tr> <td>7</td> <td>14</td> <td>21</td> <td>28</td> <td>35</td> <td>42</td> <td>49</td> </tr> <tr> <td>9</td> <td>18</td> <td>27</td> <td>36</td> <td>45</td> <td>54</td> <td>63</td> </tr> <tr> <td>25</td> <td>50</td> <td>75</td> <td>100</td> <td>125</td> <td>150</td> <td>175</td> </tr> </table>	6	12	18	24	30	36	42	7	14	21	28	35	42	49	9	18	27	36	45	54	63	25	50	75	100	125	150	175	4	All 3 correct for mark All 3 correct for mark All 4 correct for mark All 4 correct for mark
6	12	18	24	30	36	42																									
7	14	21	28	35	42	49																									
9	18	27	36	45	54	63																									
25	50	75	100	125	150	175																									
2. Find 1 000 more or less than a given number.																															
	<table border="1"> <tr> <td>1 000 less</td> <td></td> <td>1 000 more</td> </tr> <tr> <td>26</td> <td>1 026</td> <td>2 026</td> </tr> <tr> <td>13 321</td> <td>14 321</td> <td>15 321</td> </tr> </table>	1 000 less		1 000 more	26	1 026	2 026	13 321	14 321	15 321	2	Both answers on each row correct for 1 mark																			
1 000 less		1 000 more																													
26	1 026	2 026																													
13 321	14 321	15 321																													
3. Count backwards through zero to include negative numbers.																															
a	Numbers correctly placed on the thermometer at -4 and 7	2	One mark each number																												
b	<table border="1"> <tr> <td>6</td> <td>3</td> <td>0</td> <td>-3</td> <td>-6</td> <td>-9</td> </tr> </table>	6	3	0	-3	-6	-9	1	All correct for mark																						
6	3	0	-3	-6	-9																										
4. Recognise the place value of each digit in a four digit number.																															
	<table border="1"> <tr> <td>3 <u>4</u>78</td> <td>70 or 7 tens</td> </tr> <tr> <td><u>2</u> 099</td> <td>2000 or 2 thousand</td> </tr> <tr> <td>6 2<u>1</u>9</td> <td>9 or 9 units / ones</td> </tr> <tr> <td>8 <u>7</u>23</td> <td>700 or 7 hundred</td> </tr> </table>	3 <u>4</u> 78	70 or 7 tens	<u>2</u> 099	2000 or 2 thousand	6 2 <u>1</u> 9	9 or 9 units / ones	8 <u>7</u> 23	700 or 7 hundred	4																					
3 <u>4</u> 78	70 or 7 tens																														
<u>2</u> 099	2000 or 2 thousand																														
6 2 <u>1</u> 9	9 or 9 units / ones																														
8 <u>7</u> 23	700 or 7 hundred																														
5. Order and compare numbers beyond 1,000.																															
a	1 032 2 854 6 782 6 977 8 432 9 321	1																													
b	<table border="1"> <tr> <td>3 499</td> <td><</td> <td>3 944</td> </tr> <tr> <td>4 058</td> <td>=</td> <td>4 058</td> </tr> <tr> <td>12 688</td> <td>></td> <td>8 901</td> </tr> <tr> <td>5 006</td> <td><</td> <td>5 066</td> </tr> <tr> <td>11 347</td> <td>></td> <td>11 307</td> </tr> </table>	3 499	<	3 944	4 058	=	4 058	12 688	>	8 901	5 006	<	5 066	11 347	>	11 307	2	All to be correct to get 2 marks. Award 1 mark if one error													
3 499	<	3 944																													
4 058	=	4 058																													
12 688	>	8 901																													
5 006	<	5 066																													
11 347	>	11 307																													
6. Identify, represent and estimate numbers using different representations. Read and write numbers up to 1 000 in numerals and words.																															
a	Arrow drawn approximately $\frac{3}{4}$ along	1																													
b	Arrow drawn between $\frac{1}{2}$ and $\frac{3}{4}$, nearer to $\frac{3}{4}$	1																													

question	answer	marks	notes	
c	379	Three hundred and seventy nine	5	When writing numbers in words, accept incorrect spellings as long as it can be decoded but don't accept just the digits written eg three seven nine
	607	Six hundred and seven		
	511	Five hundred and eleven		
	962	Nine hundred and sixty two		
	309	Three hundred and nine		

7. Round any number to the nearest 10, 100 or 1,000.

a	23	20	3
	155	160	
	1 366	1 370	
b	567	600	3
	2 338	2 300	
	12 445	12 400	
c	3 362	3 000	3
	11 499	11 000	
	216 733	217 000	

8. Solve number and practical problems that involve all of the above and with increasingly large positive numbers.

a	Congo	4 700 km	5 000 km	5	Award the mark, even if km omitted
	Amazon	6 400 km	6 000 km		
	Nile	6 695 km	7 000 km		
	Indus	3 180 km	3 000 km		
	Yellow River	6 650 km	7 000 km		
b	longest river	Nile	1		
		Yellow River			
		Amazon			
		Congo			
	shortest river	Indus			
c	45km	1			

9. Read Roman Numerals to 100.

a	IV (at 4) VI (at 6) X (at 10) XII (at 12)	4
b	XX - 20 , L - 50 , C - 100 , XXIV - 24 LXXIII - 73 , LIX - 59 , XXXVI - 36	7
		Total 50