


16 Write the number, which these resources represent.



17 Order these numbers from **largest to smallest**



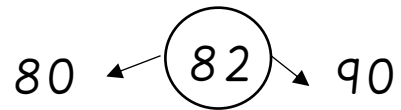

7 264 99 24 53 186 16

18 Can you think of a number to make these correct?

_____ > 382


_____ < 382

19 Circle the correct nearest ten.



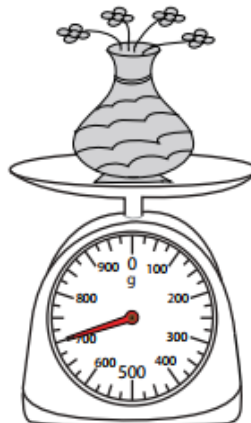
20

1)



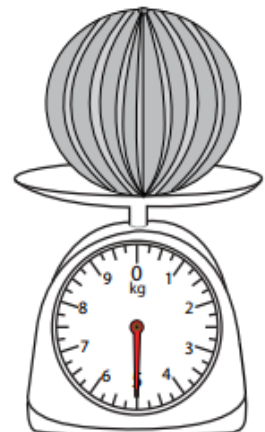
_____ kg

2)



_____ g

3)




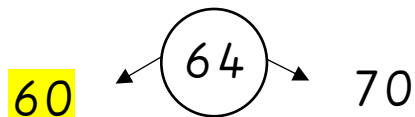
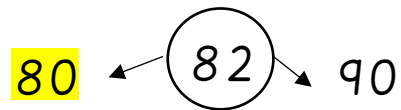

_____ kg

ANSWERS

- 1) 2
- 2) 19
- 3) 7
- 4) 12
- 5) 60
- 6) 38
- 7) 7
- 8) 101
- 9) 80
- 10) 12
- 11) 60
- 12) 19
- 13) 5
- 14) 79
- 15) 13

- 16) 256
- 17) 264 186 99 53 24 16 7
- 18) Check individual answer

19) Circle the correct nearest ten.



20) 2kg

700g

5kg