

Arithmetic and Reasoning Homework 3

Complete by 1/10/2020

1	$9 - 7 =$																		

2	$4 + 10 + 5 =$																		

3	$19 - 6 =$																		

4	$6 \times 2 =$																		

5	$70 - 10 =$																		

11 $23 + 37 =$


12 $39 - 20 =$

13 $\frac{1}{4}$ of 20 =

14 $45 + 34 =$

15 $64 - 51 =$

16 Write the number, which these resources represent.



17 If you ordered these numbers from **smallest to largest**, what would the 4th number be?

342 76 125 8 27 786

18 Can you think of a number to make these correct?

_____ > 672

_____ < 672

19 Circle the correct nearest ten.

40 ← (42) → 50

80 ← (86) → 90

60 ← (61) → 70

30 ← (37) → 40

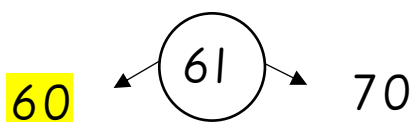


20 Circle all the numbers that could be rounded to 80

89 82 74 85 76 56 84 79

ANSWERS

- 1) 2
- 2) 19
- 3) 7
- 4) 12
- 5) 60
- 6) 38
- 7) 7
- 8) 101
- 9) 80
- 10) 12
- 11) 60
- 12) 19
- 13) 5
- 14) 79
- 15) 13
- 16) 324
- 17) 125
- 18) Check individual answer

19) Circle the correct nearest ten.



20) Circle all the numbers that could be rounded to 80

89 **82** 74 85 **76** 56 **84** **79**