

1	$8 - 5 =$	


2	$2 + 4 + 8 =$	

3	$15 - 5 =$	


4	$7 \times 2 =$	

5	$50 - 10 =$	


16 Mark with an arrow where the number 150 goes on the number line.



17 Mark with an arrow where the number 250 goes on the number line.



18 Mark with an arrow where the number 746 goes on the number line.



19 Circle the calculation, which has the answer closest to 100:

$$57 + 86 = \quad 44 + 53 =$$

$$47 + 32 = \quad 200 + 79 =$$

20 Circle the calculation, which has the answer closest to 500:

$$565 + 475 = \quad 75 + 170 =$$

$$372 + 130 = \quad 362 + 170 =$$

Answers

1. 3
2. 14
3. 10
4. 14
5. 40
6. 20
7. 17
8. 27
9. 90
10. 8
11. 534
12. 499
13. 12
14. 684
15. 614
16. *Approximately $\frac{3}{4}$ on the line*
17. *Approximately $\frac{3}{4}$ on the line*
18. *Approximately $\frac{1}{2}$ on the line*
19. 44 + 53
20. 372 + 130