

Everyone to complete the first 10 questions

1	$16 + 3 =$	


2	$2 + 4 + 8 =$	

3	$17 - 6 =$	

4	$4 \times 5 =$	

5	$60 - 30 =$	

6  $9 + 17 =$



7  + 30 = 37



8  $83 + 5 =$



9  $100 + 41 =$



10  $\frac{1}{2}$  of 8 =



11

$+ 372 = 895$

12

One hundred and forty two more than one hundred and sixty five is?

13

$\frac{2}{3}$  of 30 =

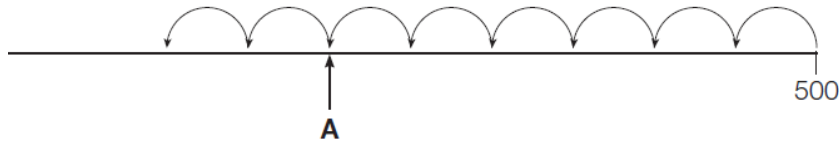
14

762 is  more than 462

15

$78 + \text{  } = 60 + 38$

16



Ben is counting back in 5s from 500. What number is A pointing to?

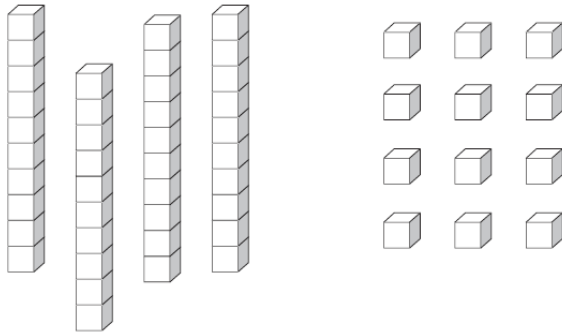
17

Esther reads 416 pages of her book.  
She reads 127 more pages than Peter.

How many pages does Peter read?

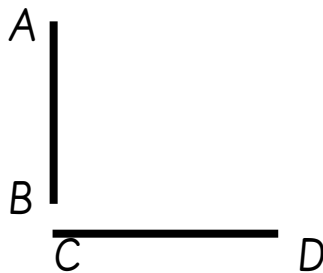
18

John makes a number. He thinks it is 412



Do you agree? Yes or no. Explain why?

19



Line AB is perpendicular to line CD. True or false.

20



Draw a line that is parallel to line EF.

## Answers

1. 19

2. 14

3. 11

4. 20

5. 30

6. 26

7. 7

8. 88

9. 141

10.4

11.523

12.307

13.20

14.300

15.20

16.470

17.289

18.52

19.True

20.

